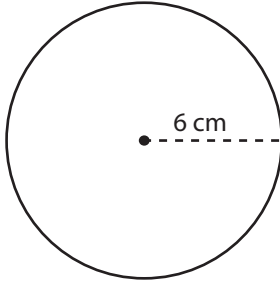


Area - Mixed Shapes

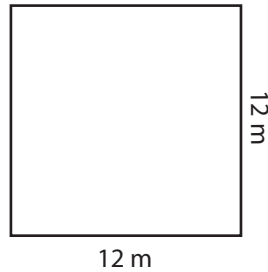
Find the area of each figure.

1)



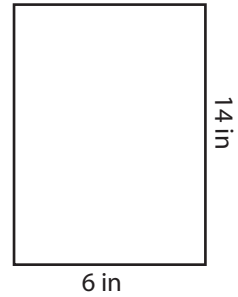
Area = _____

2)



Area = _____

3)



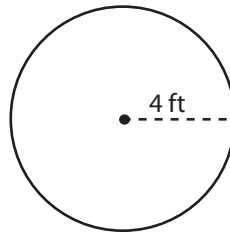
Area = _____

4)



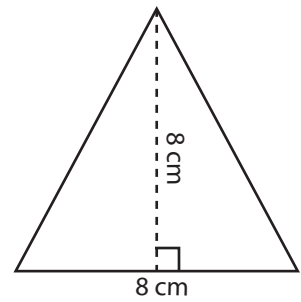
Area = _____

5)



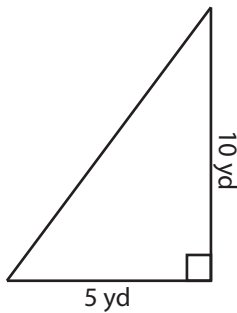
Area = _____

6)



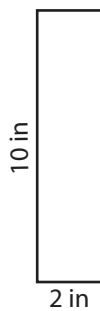
Area = _____

7)



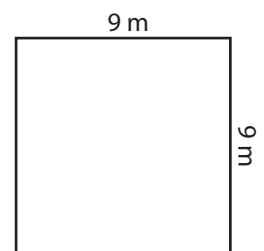
Area = _____

8)



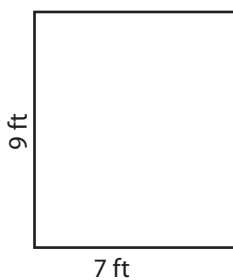
Area = _____

9)



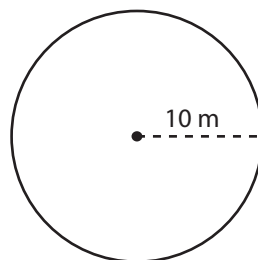
Area = _____

10)



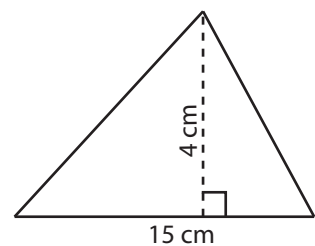
Area = _____

11)



Area = _____

12)

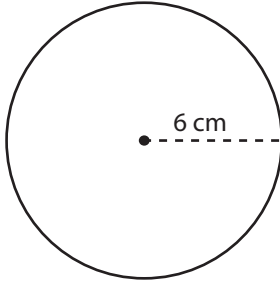


Area = _____

Answer Key

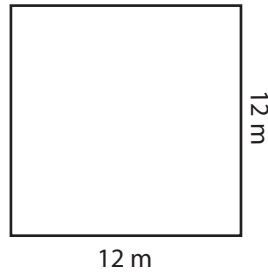
Find the area of each figure.

1)



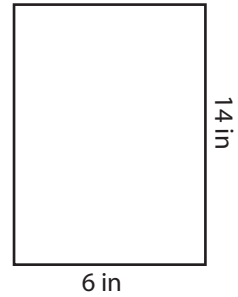
Area = $36\pi \text{ cm}^2$

2)



Area = 144 m^2

3)



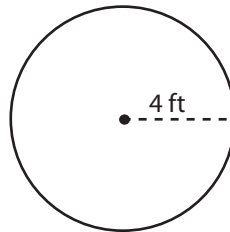
Area = 84 in^2

4)



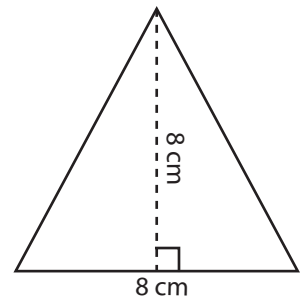
Area = 21 yd^2

5)



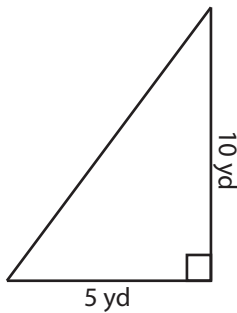
Area = $16\pi \text{ ft}^2$

6)



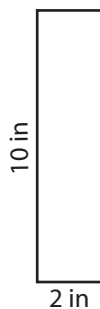
Area = 32 cm^2

7)



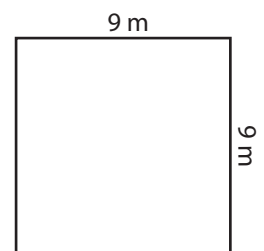
Area = 25 yd^2

8)



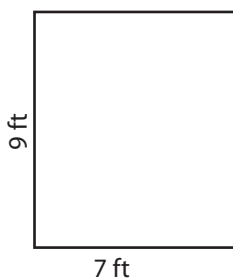
Area = 20 in^2

9)



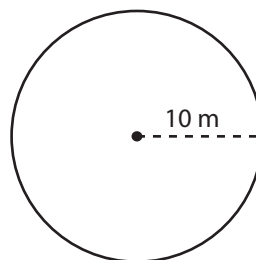
Area = 81 m^2

10)



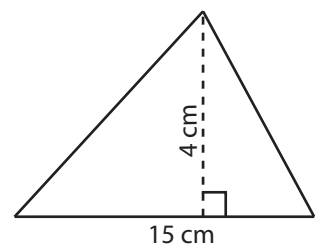
Area = 63 ft^2

11)



Area = $100\pi \text{ m}^2$

12)



Area = 30 cm^2