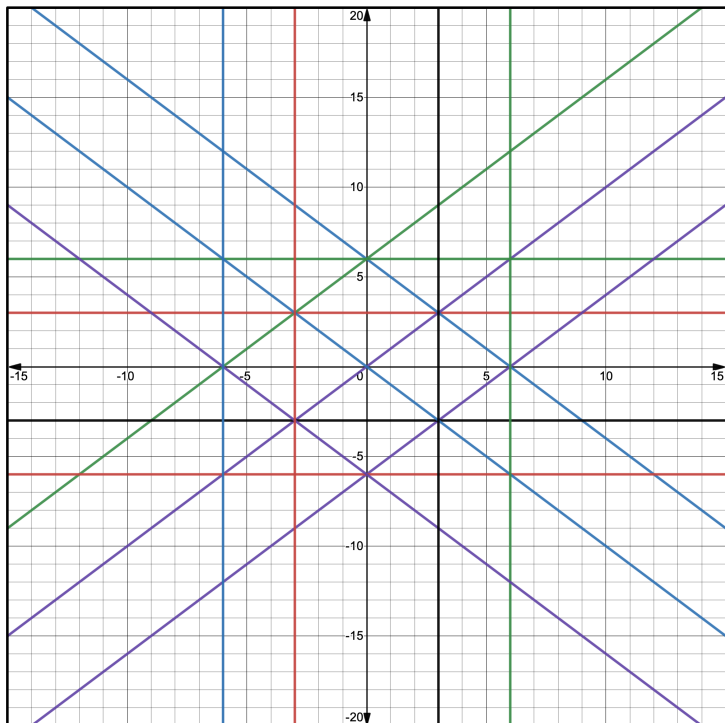
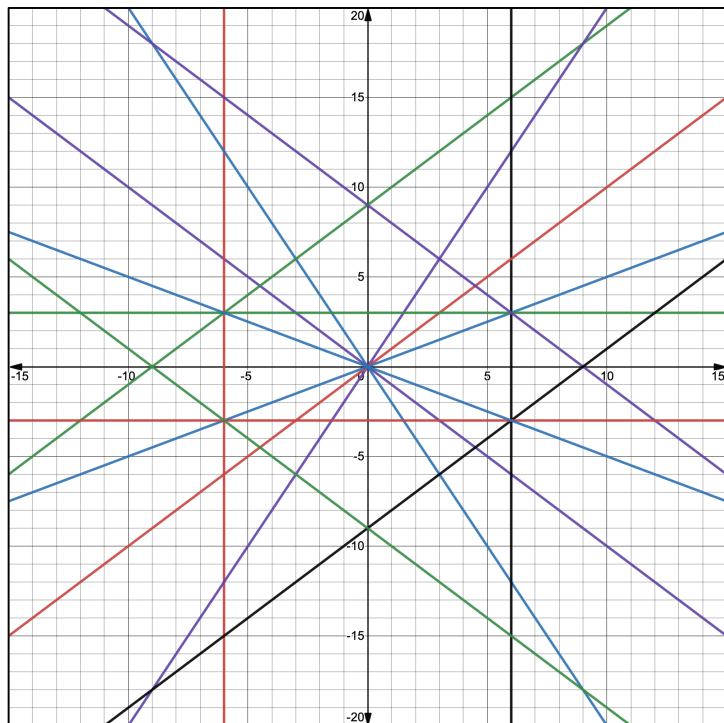


Graphing Lines Art Activity

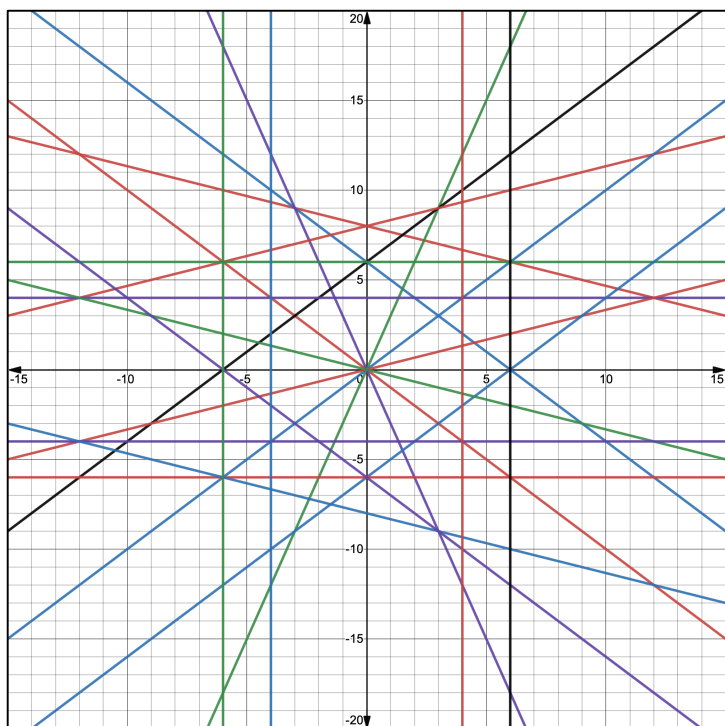
Level #1



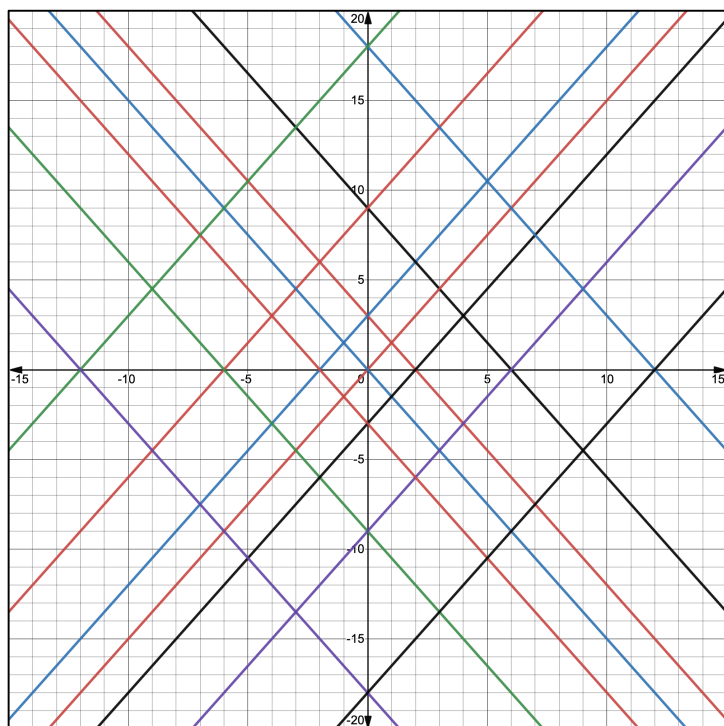
Level #2



Level #3



Level #4



Name: _____

SLOPE INTERCEPT FORM GRAPHING ART ACTIVITY — LEVEL #3

$y = -x$	$y = -\frac{1}{3}x + 8$	$y = -x + 6$	$y = 3x$	$y = -3x$	$y = x + 6$	$y = \frac{1}{3}x + 8$	$y = x$
$y = 6$	$y = 4$	$y = \frac{1}{3}x$	$y = x - 6$	$y = -\frac{1}{3}x$	$y = -4$	$y = \frac{1}{3}x - 8$	$y = -6$
$y = -\frac{1}{3}x - 8$	$y = -x - 6$	$x = 6$	$x = 4$	$x = -4$	$x = -6$		

